



Represent Numbers to 1,000

1a. Write the number represented by the Base 10.



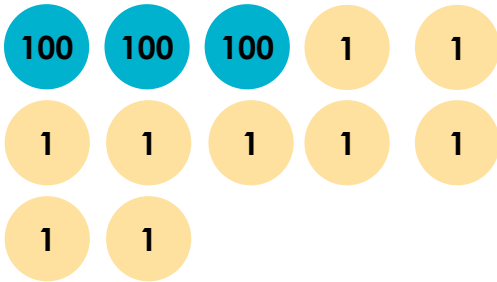
VF

1b. Write the number represented by the Base 10.



VF

2a. Which of the values is not equal to the representation below?



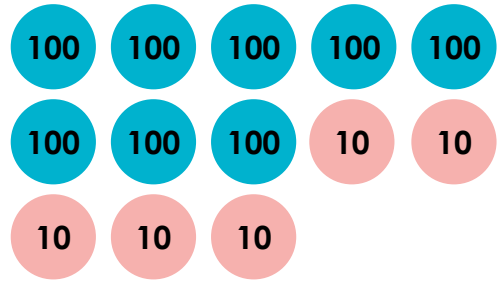
A. 399

B. 309

C. three hundred and nine

VF

2b. Which of the values is not equal to the representation below?



A. 850

B. 805

C. eight hundred and fifty

VF

3a. Draw the value described by the clues below using a suitable representation.

This 3-digit number has:

**three ones
four hundreds
four fewer tens than the hundreds**

VF

3b. Draw the value described by the clues below using a suitable representation.

This 3-digit number has:

**six tens
one hundred
one fewer ones than the hundreds**

VF

Represent Numbers to 1,000

1a. 476

1b. 529

2a. A

2b. B

3a. Accept answers that represent 403

3b. Accept answers that represent 160